




Big vs Small

Size Comparison Worksheet. Answer the questions by circling the correct picture.

Which is bigger?




Which is smaller?




Which is smaller?



Which is bigger?



Which is bigger?



Which is smaller?

