




## Long vs Short

Size Comparison Worksheet. Answer the questions by circling the correct picture.


Which is longer?



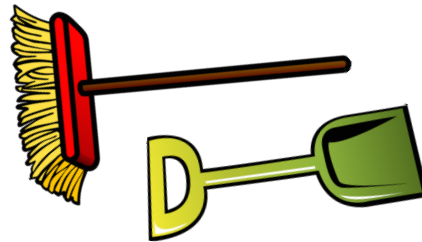
Which is shorter?



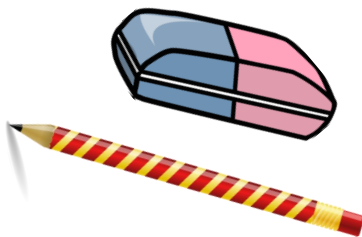
Which is shorter?



Which is longer?



Which is shorter?



Which is longer?

